

MMOS QUIZ RULES AND REGULATIONS


- The Quiz will be conducted during the LIVE lesson. Upon submission of the quiz, you will receive your results via email.
- Please login to your Google Account in your web browser before the lesson. You must login to participate in the Quiz. ([Click Here](#) to create a Google Account)
- Each Google Account is only allowed to submit the Quiz ONE (1) TIME. You will be given time to do so during the LIVE lesson. Please wait till then, we will do it together! 😊

[>>> CLICK HERE TO LOGIN AND START THE QUIZ <<](#)

Group A – Lesson 5

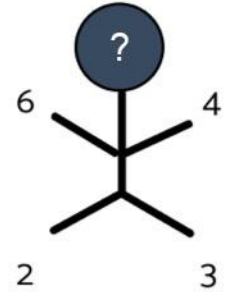
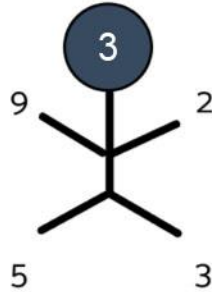
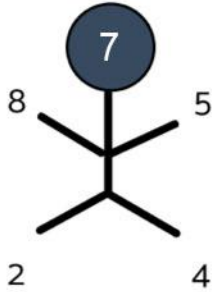
Example 1

How many ducks balance the crocodile?



Example 2

Find the missing number.



Example 3

Find the 87th number in the following sequence

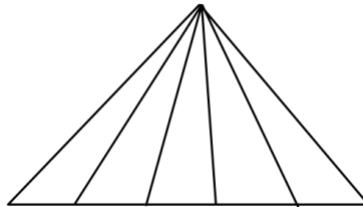
2, 4, 6, 8, 0, 2, 4, 6, 8, 0, 2, 4, 6, 8, ...

Example 4

10 lampposts are equally spaced along a straight line. The distance between two consecutive lampposts is 40 m. What is the distance between the 1st and the last lampposts?

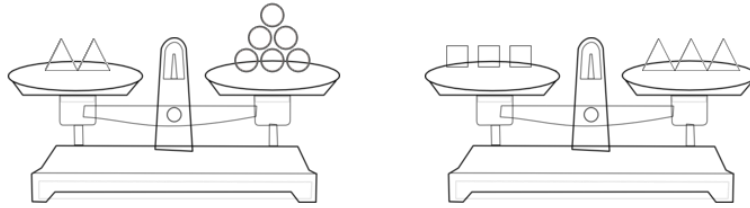
Example 5

How many triangles are there altogether?



Practice 1

How many circles balance one square?




Practice 2

Find A and B in the number pattern below:

1
 1 1
 1 2 1
 1 3 3 1
 1 4 6 4 1
 1 () 10 () 5 1

Practice 3

Freddie the frog jumps from one lily pad to another as shown in the diagram below. On which lily pad will he land on his 59th jump.



Practice 4

During COVID-19, people practice social distancing by standing 1.5 metres away from each other in a queue. Jane was the 3rd person in line while Jason was the 18th. What is the distance between them?

Practice 5

How many rectangles are there in the figure below?

